

Key stage 3 mathematics 2003
Mental mathematics Test C

First name _____

Last name _____

School _____

Total marks

Time: 5 seconds continued

7		<input type="text"/>
8		-5 <input type="text"/>
9		n <input type="text"/>

Time: 10 seconds

10		2pm <input type="text"/>
11	5.3, 5.2, 5.1, _____, _____	<input type="text"/>
12	£	9p <input type="text"/>

Practice question

		30	<input type="text"/>
--	--	----	----------------------

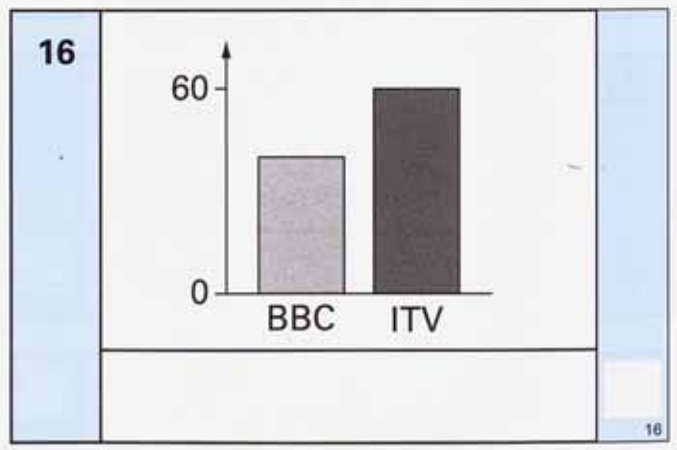
Time: 5 seconds

1		<input type="text"/>
2		<input type="text"/>
3	£	£38.95 <input type="text"/>
4		$a + b = 20$ <input type="text"/>
5	£	50% <input type="text"/>
6		<input type="text"/>

13	<table border="1"> <tr> <td></td><td></td><td></td><td></td> </tr> <tr> <td></td><td></td><td></td><td></td> </tr> </table>									<input type="text"/>

14		72 38 <input type="text"/>
----	--	----------------------------


15		<input type="text"/>
----	--	----------------------




Time: 10 seconds continued

17		17
-----------	--	----

18	£	£9.50	18
-----------	---	-------	----

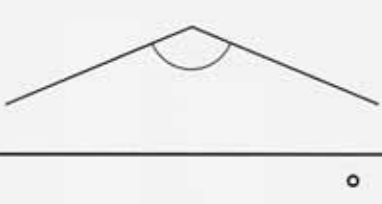
19		19
-----------	---	----

20		20
	pupils	

21		21
-----------	--	----

22	0.6 1 1.4 1.8 2.2	22
-----------	---------------------------	----

23		23
-----------	--	----


24		24
-----------	---	----

25		$3a + 4a + 2a$	25
-----------	--	----------------	----

Time: 15 seconds

26	Grey Rd	10 30	10 50	11 10	26
	Station	10 48	11 08	

27		18 19 20 21 22	27
-----------	--	------------------------	----

28		28
-----------	---	----

29	red	3	29
	blue	7	
	green	10	

30		$34 \times 56 = 1904$ 35×56	30
-----------	--	---	----