



Key stage 3 mathematics 2005
Mental mathematics Test C

First name _____

Last name _____

School _____

Total marks

Time: 5 seconds continued

6		°	
----------	--	---	--

7		$\frac{3}{9}$	
----------	--	---------------	--

8		$3m + m$	
----------	--	----------	--

Time: 10 seconds

9	£		50p
----------	---	--	-----

10		25	28
-----------	--	----	----

11		10:30	am
-----------	--	-------	----

12	125, 115, 105,		
-----------	----------------------	--	--

13			
-----------	--	--	--

14	-1°C 5°C -3°C		
	2°C 0°C		

15			
	people		

Practice question

		90	
--	--	----	--

Time: 5 seconds

1			
----------	--	--	--

2			
----------	--	--	--

3		$b = 14 + a$	
----------	--	--------------	--

4			
----------	--	--	--

5		9300	
----------	--	------	--



Time: 10 seconds continued

16

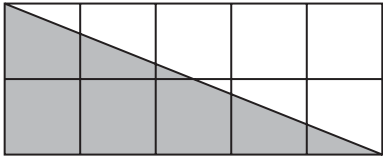
17 £ 80p

18 seconds

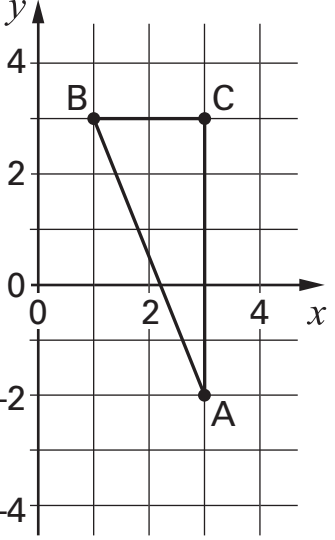
19 2000 992

20 3, 8, 3, 1, 4

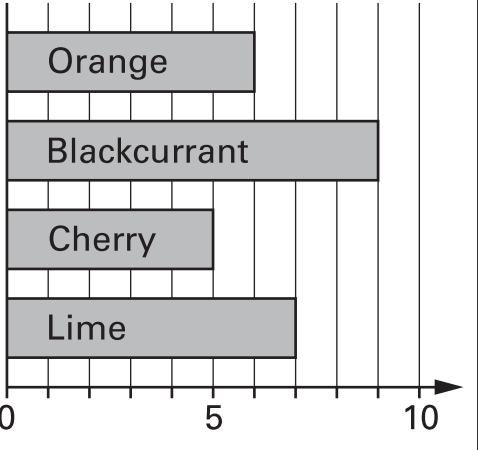
21 °C -2°C

22 
cm²

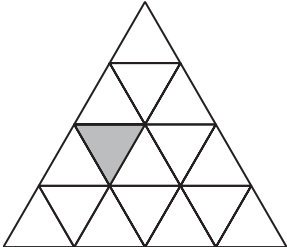
23 £ £60

24 
(,)

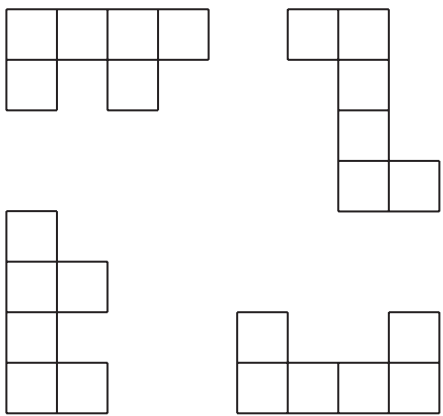
Time: 15 seconds

25 

26 W

27 

28 and

29 

30 25 cards
16 even numbers

