

Year 7 mathematics 2005
Mental mathematics test

First name _____

Last name _____

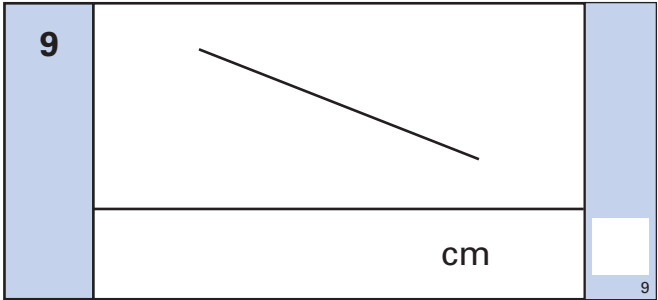
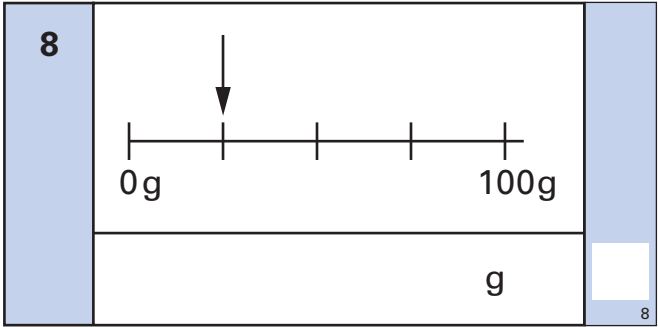
School _____

Total marks

Time: 10 seconds

6	April					
	Mon	4	11	18	25	
	Tue	5	12	19	26	
	Wed	6	13	20	27	
	Thu	7	14	21	28	
	Fri	1	8	15	22	29
	Sat	2	9	16	23	30
	Sun	3	10	17	24	
<input type="text"/>					6	

7	<input type="text"/>	24	<input type="text"/>
			7



Practice question

<input type="text"/>	95	<input type="text"/>
----------------------	----	----------------------

Time: 5 seconds

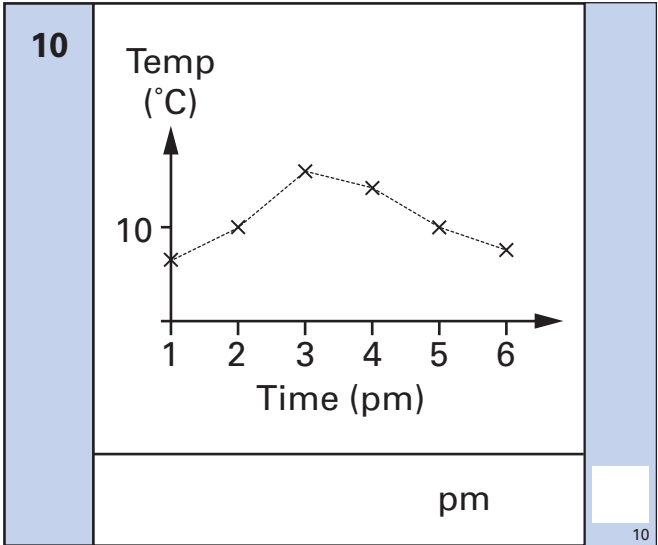
1	<input type="text"/>	19 13	<input type="text"/>
			1

2	<input type="text"/>	17	<input type="text"/>
			2

3	<input type="text"/>	<input type="text"/>	
			3


4	<input type="text"/>	50% 60	<input type="text"/>
			4

5	<input type="text"/>	400	<input type="text"/>
			5



Time: 10 seconds continued

11		$6 \times 5 - 7$	<input type="text"/>
-----------	--	------------------	----------------------

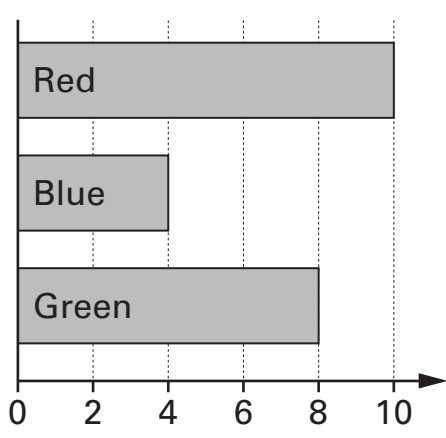
12		250 ml	
		ml	<input type="text"/>

13	$^{\circ}\text{C}$	-8°C	<input type="text"/>
-----------	--------------------	----------------------	----------------------

14		36	<input type="text"/>
-----------	--	----	----------------------

15		$4y = 44$	<input type="text"/>
-----------	--	-----------	----------------------

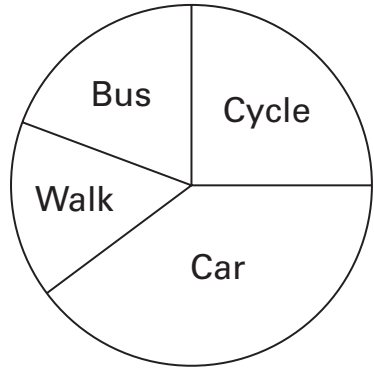
Time: 15 seconds

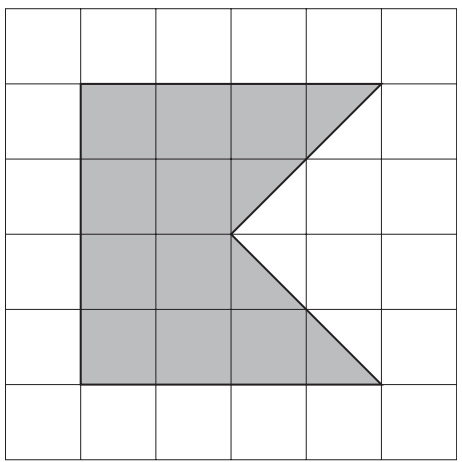
16		
	pupils	<input type="text"/>

Time: 15 seconds continued

17	<table border="1" style="margin: auto;"> <tr> <td style="width: 100px; text-align: center;">Pen</td> <td style="width: 100px; text-align: center;">30p</td> </tr> <tr> <td style="text-align: center;">Pencil</td> <td style="text-align: center;">25p</td> </tr> </table>	Pen	30p	Pencil	25p	
Pen	30p					
Pencil	25p					
	\pounds	<input type="text"/>				

18	33, 29, 25, 21, ..., ...	
	<input type="text"/>	<input type="text"/>

19		
	$\%$	<input type="text"/>

20		
	cm^2	<input type="text"/>