

**Key stage 3 mathematics 2007**

**Mental mathematics Test C**

First name \_\_\_\_\_

Last name \_\_\_\_\_

School \_\_\_\_\_

Total marks

**Time: 5 seconds continued**

7		$n$	<input type="text"/>
---	--	-----	----------------------

8		$\frac{4}{5}$	<input type="text"/>
---	--	---------------	----------------------

**Time: 10 seconds**

9	40, 37, 34, _____, _____	<input type="text"/>
---	--------------------------	----------------------

10	<p>Number of pupils</p> <p>pupils</p>	<input type="text"/>
----	---------------------------------------	----------------------

**Practice question**

		195	
--	--	-----	--

**Time: 5 seconds**

1	£	£17.85	<input type="text"/>
---	---	--------	----------------------

2		5 40	<input type="text"/>
---	--	------	----------------------

3	7 5 8 4 5	<input type="text"/>
---	-----------	----------------------

4		<input type="text"/>
---	--	----------------------

5	cm	70mm	<input type="text"/>
---	----	------	----------------------

6		0.1 0.2	<input type="text"/>
---	--	---------	----------------------

11		<input type="text"/>
----	--	----------------------

12		North	<input type="text"/>
----	--	-------	----------------------



13		54 66	<input type="text"/>
----	--	-------	----------------------

14		<input type="text"/>
	cm	<input type="text"/>

15		<input type="text"/>
----	--	----------------------

**Time: 10 seconds continued**

16

Cat	
Dog	

\_\_\_\_\_ people

16

17

\_\_\_\_\_ £7

17


18

\_\_\_\_\_  $y = x - 7$

18

19

\_\_\_\_\_



19

20

£ \_\_\_\_\_ £1.40

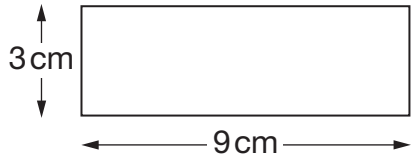
20

21

\_\_\_\_\_ °C -3°C

21

22



\_\_\_\_\_ cm<sup>2</sup>

22

23

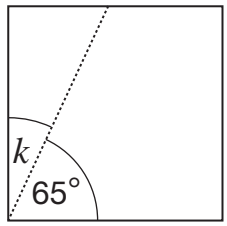
3 red 2 blue

\_\_\_\_\_

23

24

\_\_\_\_\_ °



24

**Time: 15 seconds**

25

Notebook	£1.05
Ruler	65p
Pencil	40p

£ \_\_\_\_\_

25

26

\_\_\_\_\_ 15 24

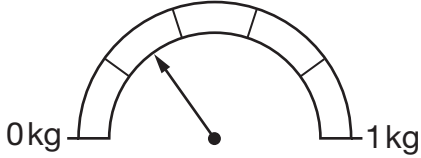
26

27

Spring	30%
Summer	22%
Autumn	28%
Winter	%

27

28



\_\_\_\_\_ kg

28

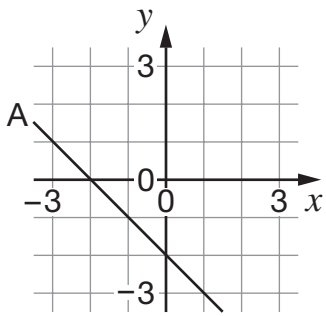
29

28 × 16 = 448

28 × 32 = \_\_\_\_\_

29

30



\_\_\_\_\_ ( , )

30