

Key stage 3 mathematics 2009

Mental mathematics Test C

First name _____

Last name _____

School _____

Total marks

Practice question

		24	
--	--	----	--

Time: 5 seconds

1		
----------	--	--

2	minutes	
----------	---------	--

3	£	£26.58	
----------	---	--------	--

4		63	
----------	--	----	--

5		206	
----------	--	-----	--



6		
----------	--	--

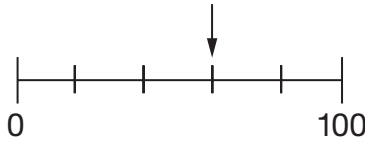
7		b	
----------	--	-----	--

Time: 5 seconds continued

8		-3	
----------	--	----	--

Time: 10 seconds

9	Silver		
	Red		

10		

11	6.45 pm	45 minutes	
	pm		

12	2.3	2.5	2.7	
	_____, _____			

13		9343	

14	16, 12, 8, 4	
	_____, _____	

15		$a - b = 14$	

16		2.6 0.8	

Time: 10 seconds continued

17

Off
Spin Wash
Rinse

o

17

18

No
Yes

people

18

19

	$8pq$
--	-------

19

20

cm	8cm
----	-----

20

21

£	£50
---	-----

21

Time: 15 seconds

22

in → x4 → +6 → out

22

23

	2009
--	------

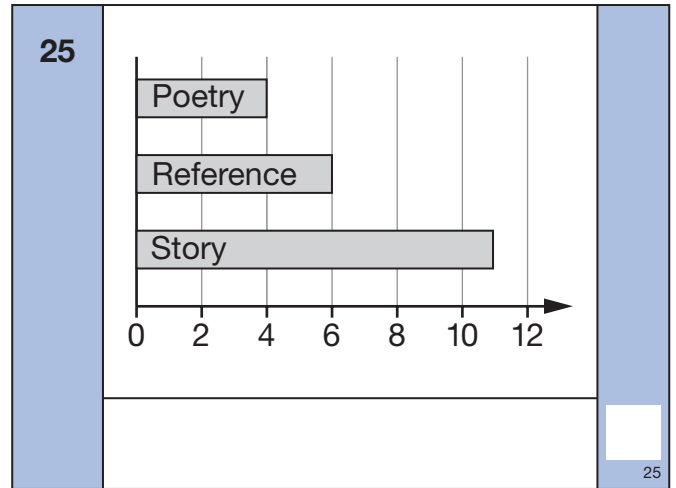
23

24

magazines	25%	
food	40%	
clothes		
		%

24

Time: 15 seconds continued



26

_____ cm²

26

27

27

28

rectangle	rhombus
parallelogram	
square	trapezium

28

29

$4.3 \times 6 = 25.8$

29

30

21	23	25	27
----	----	----	----

30