

Key stage 3 mathematics 2003

Mental mathematics Test A

First name _____

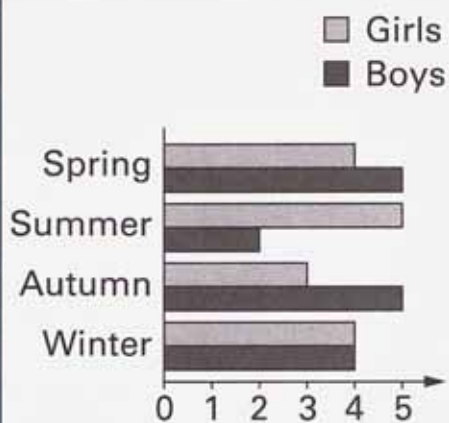
Last name _____

School _____

Total marks

Time: 10 seconds

7



pupils

7

Practice question

		60	
--	--	----	--

Time: 5 seconds

1		
---	--	--

2		
---	--	--

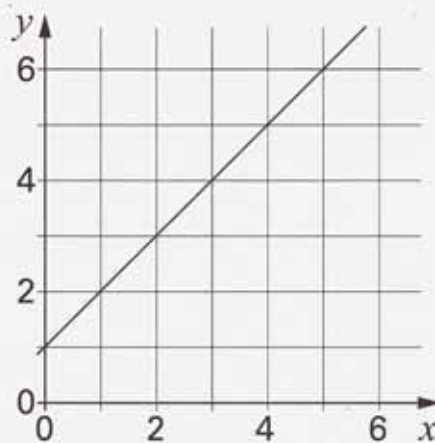
3		-3	
---	--	----	--

4		n	
---	--	-----	--

5		
---	--	--

6	km	30 km per hour	
---	----	----------------	--

8



(,)

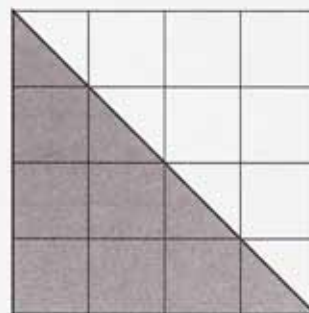
8

9

	0.75	
--	------	--

9

10



cm²

10

