

**Year 7 mathematics 2006**

**Mental mathematics test**

**First name** \_\_\_\_\_

**Last name** \_\_\_\_\_

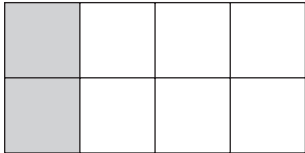
**School** \_\_\_\_\_

**Total marks**

**Time: 10 seconds**

<b>7</b>		<b>French</b>	<b>German</b>	<input type="text"/> 7
	<b>Boys</b>	22	36	
	<b>Girls</b>	39	31	
boys				<input type="text"/>

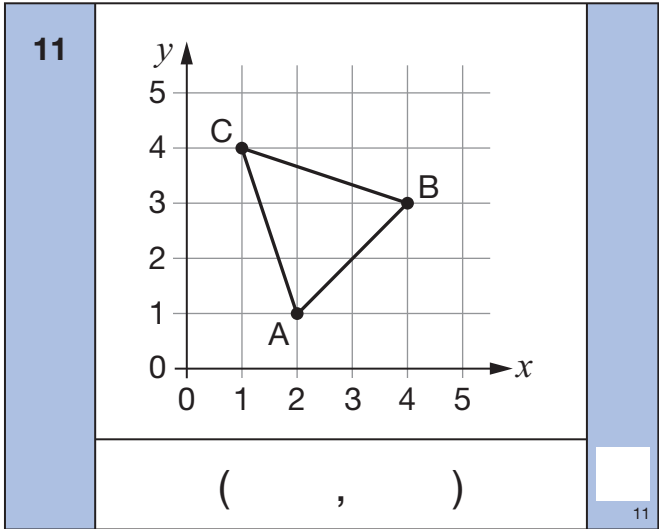
<b>8</b>		<b>NE</b>	<input type="text"/> 8
----------	--	-----------	---------------------------

<b>9</b>		<input type="text"/> 9

<b>10</b>		<b>2763</b>	<input type="text"/> 10
-----------	--	-------------	----------------------------

**Practice question**

		<b>15</b>	
--	--	-----------	--



**Time: 5 seconds**

<b>1</b>		<input type="text"/> 1
----------	--	---------------------------

<b>2</b>		<b>73</b>	<input type="text"/> 2
----------	--	-----------	---------------------------

<b>3</b>		<input type="text"/> 3
----------	--	---------------------------

<b>4</b>		<b>4000</b>	<input type="text"/> 4
----------	--	-------------	---------------------------

<b>5</b>	hours	<b>180 minutes</b>	<input type="text"/> 5
----------	-------	--------------------	---------------------------



<b>6</b>		<b>5.9</b>	<input type="text"/> 6
----------	--	------------	---------------------------

<b>12</b>		<b>32 5</b>	<input type="text"/> 12
-----------	--	-------------	----------------------------

<b>13</b>	<b>0.3</b>	<b>0.4</b>	<b>0.308</b>	<input type="text"/> 13
	<b>0.03</b>	<b>0.2</b>		

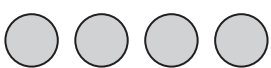

Time: 15 seconds

<b>14</b>	p	<input type="text"/>
-----------	---	----------------------

<b>15</b>	Yes		<input type="text"/>
	No		

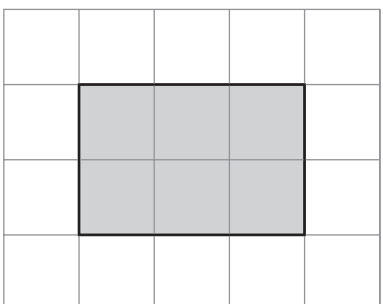
<b>16</b>	boxes	28	<input type="text"/>
-----------	-------	----	----------------------

<b>17</b>		<input type="text"/>
-----------	--	----------------------

<b>18</b>	School dinner		<input type="text"/>
	Packed lunch		

pupils

<b>19</b>	g	$\frac{1}{2}$ kg    200g	<input type="text"/>
-----------	---	--------------------------	----------------------

<b>20</b>		<input type="text"/>
	cm	